



# GREAT VICTORY ACADEMY

END OF YEAR EXAMINATION - 2012      CITIZENSHIP EDUCATION - CLASS FOUR

**Name:** ..... **Marks:**.....  
**Folio No:**..... **Date:**.....

*Circle the right answer*

- (1) Which of these is an example of a right?  
(a) Right to kill (b) Right to live (c) Right to stealing (d) Right to eat someone's food
- (2) Which of these attributes is generally referred to Ghanaians?  
(a) Fighters (b) Quiet people (c) Peace-lovers (d) Gossips
- (3) What has the ability to influence others to do something?  
(a) Orders (b) Constitution (c) Authority (d) Law
- (4) Which of these men was vice president in 2008?  
(a) John Dramani Mahama (b) Alhaji Aliu Mahama  
(c) John Agyekum Kuffour (d) J.J Rawlings
- (5) Ghana's current constitution was written in the year.....  
(a) 1929 (b) 1299 (c) 1992 (d) 1922
- (6) Which of these is considered in decision making?  
(a) Your friends (b) Your region  
(c) The effects of the decision (d) Where you were born
- (7) What attribute will make development possible in a country?  
(a) Mistrust (b) Disrespect (c) Hardwork (d) Violence
- (8) Who is the current president of America?  
(a) Abraham Lincoln (b) Evans Atta Mills  
(c) Barrack Obama (d) George Washington
- (9) Which of these is an arm of government?  
(a) Jurisdiction (b) Executive (c) Excursion (d) Constitution
- (10) What type of constitution is used in Ghana?  
(a) Note book (b) Unwritten (c) Oral (d) Written
- (11) What is the name given to a child who has been abandoned and his/her parents unknown?  
(a) Orphan (b) Foundling (c) Citizen (d) Pupil
- (12) What name is given to the situation where one is not allowed to enjoy his/her basic rights?  
(a) Slavery (b) Human rights abuse  
(c) Fundamental human rights (d) Constitutional rights
- (13) What is the full meaning of CHRAJ?  
(a) Committee on Human Rights and Administrative Justice  
(b) Commander on Human Rights Administration of Justice  
(c) Commission on Human Rights and Administrative Justice  
(d) Commission on Humanity Rights Administrative Justice
- (14) Which of these is not a form of human right abuse?  
(a) Being killed (b) Being denied food (c) Child labour (d) Being educated
- (15) What name is given to the type of authority from God or a spirit?  
(a) Autocratic (b) Divine (c) Coup d'état (d) Election

- (16) Which of these is not a way of claiming one's right?  
 (a) Telling friends (b) Reporting to the police  
 (c) Reporting to CHRAJ (d) Demonstrating on the streets
- (17) What attribute is necessary to establish a good inter-personal relationship?  
 (a) Eating well (b) Being a talkative (c) Good communication (d) Insulting others
- (18) Which arm of government sees to the day-to-day activities of the country?  
 (a) Executive (b) Excursion (c) Judiciary (d) Legislature
- (19) Whose responsibility is it to maintain law and order in the community?  
 (a) The president (b) The speaker (c) Attorney general (d) Everybody
- (20) What name is given to the beliefs that guide our lives?  
 (a) Law (b) Constitution (c) Values (d) Attitude
- (21) Who is a member of parliament?  
 (a) A parliamentarian (b) Minister (c) Police officer (d) A citizen
- (22) Who heads the supreme court of Ghana?  
 (a) Lawyers (b) Chief justice (c) Wrong doers (d) Speaker of parliament
- (23) How many constituencies are there in Ghana?  
 (a) 290 (b) 230 (c) 260 (d) 203
- (24) When did Ghana become a Republican State?  
 (a) 6<sup>th</sup> March, 1957 (b) 1<sup>st</sup> June, 1906 (c) 1<sup>st</sup> July, 1960 (d) 6<sup>th</sup> March, 1960
- (25) What makes a community?  
 (a) Buildings (b) People (c) Area (d) Lands
- (26) Who is the commander in Chief of the armed forces?  
 (a) The president (b) Soldier (c) Speaker of parliament (d) Chief Justice
- (27) Which of these is not a national symbol of Ghana?  
 (a) Colonial masters (b) Flag (c) Pledge (d) Anthem
- (28) What should one do, when singing the national anthem?  
 (a) Sit down (b) Put the right hand on left side of the chest  
 (c) Stand at attention (d) Dancing
- (29) What name is given to one's natural ability to do something well?  
 (a) Profession (b) Mission (c) Talents (d) Weakness
- (30) .....is the money one pays for breaking the laws?  
 (a) Token (b) Fine (c) Bribe (d) Salary

**SECTION B (THEORY)**  
***Answer only three (3) questions***

- 1(a) Explain the work of the following arms of governments;
- (i) Executive
  - (ii) Judiciary
  - (iii) Legislature
- (b) Mention the names of the current heads of the above arms of government.
- 2(a) Explain the term constitution.
- (b) Define Basic human rights.
- (c) Mention three (3) rights you enjoy as a child.
- (d) Mention two (2) importance of the rights you enjoy.
- 3(a) Explain the following;
- (i) Talents.
  - (ii) Citizen.
  - (iii) National symbol.
- (b) What is the meaning of the following on the Coat of Arms?
- (i) the lion
  - (ii) cocoa tree
  - (iii) black star
- (c) Mention three (3) values that are cherished in the society
- 4(a) Define
- (i) Human rights abuse.
  - (ii) Trespassing .
- (b) Mention three (3) ways by which ones rights can be abused.
- (c) Mention three (3) agencies that cases of human rights abuse can be reported to.
- 5(a) Define
- (i) Critical thinking
  - (ii) Power
  - (iii) Authority
- (b) Mention four (4) sources of authority.
- (c) Mention five (5) characteristics of a good citizen





# GREAT VICTORY ACADEMY

END OF YEAR EXAMINATION - 2012

INTEGRATED SCIENCE - CLASS FOUR

Name: ..... Marks:.....

Folio No:..... Date:.....

*Circle the right answer*

- (1) Which of the following is not a classification of living things?  
(a) Plants (b) Animals (c) Water
- (2) All living things perform the following activities except.....  
(a) growth (b) reproduction (c) writing
- (3) Plants whose stems are upright and grow upwards are .....  
(a) climbing plants (b) erect plants (c) creeping
- (4) Plant roots that go deep into the soil are known as.....  
(a) tap roots (b) fibrous roots (c) deep roots
- (5) Which of the following plants have red leaves?  
(a) Acaypha (b) Hibiscus (c) Croton
- (6) .....are animals that feed on only flesh.  
(a) Omnivores (b) Carnivores (c) Herbivores
- (7) Which of the following animals help us on the farm?  
(a) Cat (b) Lion (c) Bull
- (8) What name is given to the movement of snakes?  
(a) Crawling (b) Slithering (c) Galloping
- (9) Pick the odd one out.  
(a) Sheep (b) Goat (c) Fish
- (10) Which of these is not used as a pet?  
(a) Snake (b) Cow (c) Donkey
- (11) Which of the following metals do not rust?  
(a) Iron (b) Steel (c) Aluminium
- (12) For rusting to occur, there must be air and .....  
(a) kerosene (b) water (c) oil
- (13) The reddish brown coating on the surface of a metal that has rusted is .....  
(a) chocolate (b) rust (c) dirt
- (14) When metals rust they .....  
(a) lose beauty (b) become strong (c) shine the more
- (15) Rust can be cleaned using.....  
(a) metal sponge (b) paint (c) only water
- (16) Which of the following planets no longer exist?  
(a) Mercury (b) Pluto (c) Saturn
- (17) How many planets exist in the solar system?  
(a) 9 (b) 8 (c) 10
- (18) Smaller objects moving around bigger objects in space are known as.....  
(a) rockets (b) planets (c) satellites
- (19) How many satellites has the earth?  
(a) 1 (b) 3 (c) 4

- (20) The closest planet to the sun is .....
- (a) mercury (b) venus (c) earth
- (21) Which form of energy is gotten from the earth?
- (a) Sound energy (b) Geothermal energy (c) Light energy
- (22) Which of these energies is not provided by the sun ?
- (a) Light (b) Heat (c) Sound
- (23) Which type of energy can be gotten from water?
- (a) Light energy (b) Electrical energy (c) Chemical energy
- (24) The food we eat contains.....
- (a) physical energy (b) chemical energy (c) mechanical energy
- (25) What is the unit of measurement for energy?
- (a) Newton (b) Kilograms (c) Joules
- (26) Materials that allow electricity to pass through them are called.....
- (a) conductors (b) insulators (b) semiconductor
- (27) Which of these thermometers is not used to check the temperature of patients?
- (a) clinical thermometer (b) digital thermometer (c) Laboratory
- (28) Small openings in a house that also help the room to be ventilated are called?
- (a) Vents (b) Doors (c) Windows
- (29) Which of these stabilizes current?
- (a) Capacitor (b) Inductor (c) Diode
- (30) The skin disease associated with poor diet is .....
- (a) beriberi (b) measles (c) chicken pox

### **THEORY**

*Answer question one (1) and any other two questions*

- 1(a) Define
- (i) Sea breeze
- (ii) Land breeze
- (iii) Ventilation
- (iv) Convection
- (b) Tabulate three differences between metals and non-metals.
- (c) Write down the sources of the following forms of energy.
- (i) Geothermal energy
- (ii) Chemical energy
- (iii) Light energy
- (iv) Sound energy
- 2(a) What is temperature?
- (b) (i) Mention the three (3) types of thermometers you know.
- (ii) Write down three (3) differences between clinical and laboratory thermometers.

(c) Convert the following into degree Celsius.

(i) 303k

(ii) 400k

(iii) 705k

(iv) 340k

(v) 500k

3(a) Write three (3) ways by which we can ventilate our rooms.

(b) Give three (3) reasons why our rooms must be ventilated.

(c) Write down three (3) effects of unventilated rooms.

4(a) What is frictional force?

(b) (i) Name two (2) effects of forces

(ii) List four types of forces

(c) Write down three (3) disadvantages of friction.

(d) What three (3) things should we do to prevent friction?

5(a) Define the following terms.

(i) Skin

(ii) Dermis

(iii) Epidermis

(iv) Capacitor

(b) (i) What is personal hygiene?

(ii) Write down two symptoms and two (2) preventive measures of ringworm.

(c) Tabulate two (2) differences between capacitors and inductors.

(d) Draw a circuit diagram consisting of a key, wire, battery, resistor, capacitor and L.E.D.



*Good luck*





# GREAT VICTORY ACADEMY

END OF YEAR EXAMINATION - 2012      INFORM. & COMM. TECH. - CLASS FOUR

**Name:** ..... **Marks:**.....  
**Folio No:**..... **Date:**.....

*Circle the right answer*

- (1) What name is given to the capital letters when typing?  
(a) Capital case      (b) Upper case      (c) Lowercase      (d) Upper characters
- (2) Which of the following is found on a mouse?  
(a) Keys      (b) Ports      (c) Scroll      (d) Screen
- (3) What is the name given to a tool that helps to correct the mistakes made in typing a text on the computer? (a) text correction      (b) text editor      (c) keyboard      (d) monitor
- (4) How many keys are on a standard keyboard?  
(a) 121 – 126      (b) 150 – 170      (c) 110 – 150      (d) 101 – 105
- (5) How are the keys on the keyboard arranged?  
(a) QWERTY      (b) WQERTY      (c) ABECEF      (d) QUERTY
- (6) What name is given to the act of pressing the left mouse button twice?  
(a) Dragging      (b) Copy      (c) Double click      (d) Clicking
- (7) Which keys on the keyboard are marked with digits from 0 – 9 ?  
(a) Number typing      (b) Numerals side      (c) Number keyboard      (d) Number row
- (8) Which of these is a type of booting?  
(a) Cold booting      (b) Cool booting      (c) Hot booting      (d) Heat booting
- (9) How many types of system units are available?  
(a) 3      (b) 4      (c) 2      (d) 5
- (10) What key on the keyboard is used to change from lowercase to uppercase?  
(a) Caps lock      (b) Capital load      (c) Caps off      (d) Case changer
- (11) The most important part of the computer is the .....  
(a) screen      (b) U.P.S      (c) C.P.U      (d) Ports
- (12) What is the full meaning of U.P.S?  
(a) Unlimited Power Supply      (b) Uninterruptible Power Supply  
(c) United Power Source      (d) Umbrella Power Special
- (13) Which of these is a rule in the computer laboratory?  
(a) Eat in the laboratory      (b) Always cover the computers  
(c) Play with wires      (d) Always play games
- (14) What is the full meaning of I.C.T?  
(a) Internal Computer Trade      (b) International Court Technology  
(c) Information and Communication Technology      (d) India Computer Trade
- (15) What software is used to do a specific thing on the computer?  
(a) Special software      (b) application program      (c) application letter      (d) special program
- (16) Which of these is not an example of an application program?  
(a) WordPad      (b) Encarta      (c) Monitor      (d) Notepad
- (17) What other name is given to the Central Processing Unit?  
(a) Processor      (b) Process      (c) Processing      (d) Device

- (18) Which of these looks like a keyboard?  
 (a) Function keys (b) Typewriter (c) Pillow (d) Mouse
- (19) What will appear when the start button is clicked?  
 (a) Paint window (b) File menu (c) Desktop menu (d) Start
- (20) What process is used to draw on the computer?  
 (a) Dropping (b) Click and Drag (c) Painting (d) Typing
- (21) Which type of monitor is expensive, smaller and light to carry?  
 (a) Flat panel display (b) Cathode ray tube (c) Screen (d) Desktop
- (22) What term can be used to describe the release of the arm from the left mouse button after moving on item to a destination?  
 (a) Painting (b) Dragging (c) Dropping (d) Clicking
- (23) Which of these is not a basic part of the computer?  
 (a) Monitor (b) Mouse (c) System unit (d) CD rom
- (24) What is the use of the screen learner?  
 (a) For cleaning the keyboard (b) For cleaning the screen  
 (c) For cleaning the wires (d) For mopping the floor
- (25) When turning "on" the computer, which of these is pressed first?  
 (a) Monitor (b) Keyboard (c) Mouse (d) System unit
- (26) What name is given to the information received from the computer?  
 (a) Music (b) Videos (c) Output (d) Pictures
- (27) Which special keys on the keyboard are marked F1 – F12?  
 (a) F keys (b) Function keys (c) Extra keys (d) Special keys
- (28) What actually helps us to see what the computer is doing?  
 (a) System unit (b) Mouse (c) Keyboard (d) Monitor
- (29) What name is given to a piece of meaningful writing that has been typed into the computer?  
 (a) Copy (b) Text (c) Story (d) Words
- (30) What is the full meaning of U.S.B?  
 (a) University Services Bus (b) Universal Services Bus  
 (c) Universal Serial Bus (d) United Strong Bus

### **SECTION B (THEORY)**

*Answer question one (1) and any other two (2)*

- 1(a) Explain the term computer.
- (b) Explain the two (2) main components of the computer.
- (c) Write down the four (4) main parts of the computer.
- 2(a) Write down short notes on the following;
- (i) Tower System Unit
  - (ii) Desktop System Unit
  - (iii) Cathode Ray Tube
  - (iv) Flat Panel Display



- (b) Tabulate the difference between the following;
- (i) Tower and Desktop System Unit
  - (ii) Cathode Ray Tube and flat Panel Display.

3(a) What is an application program?

(b) Write down two (2) examples of application programs and their uses.

(c) Explain the terms;

- (i) Text
- (ii) Text Editor

(d) What is the difference between a cold and warm booting?

4(a) Define

- (i) Mouse
- (ii) Keyboard

(b) Write notes on the following;

- (i) Dragging
- (ii) Dropping
- (iii) Single click
- (iv) Double clicking

5(a) Define

- (i) Ports
- (ii) Connectors

(b) Identify the following symbols on the keyboard.

- (i) \$
- (ii) \*
- (iii) @
- (iv) ^
- (v) &

(c) What is the difference between uppercase and lowercase?







- b. Write down three importance of prayers.
- c. Tabulate the differences between nuclear and extended families.

(3) a. Who is a religious personality?

- b. Copy and complete this table.

<b>Religion</b>	<b>Founder</b>	<b>Origin</b>
Judaism		
Hinduism		
Islam		
Buddhism		
Christianity		

(4) a. Explain these terms:

- i. Punishment
- ii. Mankind
- iii. Universe

b. Mention three reasons why people are punished.

c. Write down what God created on the following days:

- i. 4<sup>th</sup> day
- ii. 5<sup>th</sup> day
- iii. 6<sup>th</sup> day

(5) a. Write a short story about the following:

- i. The temptation of Jesus Christ
- ii. The marriage of Mohammed (S.A.W)

b. What is a responsible behavior?

c. Mention three people who were loyal to God.



# GREAT VICTORY ACADEMY

END OF YEAR EXAMINATION - 2012      ENGLISH COMPREHENSION      -      CLASS FOUR

**Name:** ..... **Marks:**.....

**Folio No:**..... **Date:**.....

*Read the passage carefully and answer the questions that follow*

Today is 6<sup>th</sup> March. It is a holiday. It is a great day for all Ghanaians. It is a great day in the Ghanaian Calendar. Ghanaians do not joke with that day at all. That day reminds them about something. It reminds them about their independence. It is said that Ghana had her independence on March 6<sup>th</sup>, 1957. Before the independence, Ghana was ruled by the British. Ghana was then called Gold Coast.

Dr. Kwame Nkrumah was the one who lead Ghana to gain her independence. For this reason, that very day in every year has been set as a holiday. On that very day they organize a durbar in every school in the whole country. School children go to their various schools to have a march past. Workers also go there to march. Every chief and his elders in every town also go there. The police also go there. They go there to protect people and property so that everything goes on well. Even, in the nation's capital, Accra, the president and his ministers and parliamentarians go to the independence square where they normally organize the occasion to witness and support it.



After the students have finished marching, all kinds of workers like traders, fitters, carpenters, farmers, seamen, nurses, bankers etc also take their turn of the marching. The police and soldiers band play music as they march. The president will be standing to receive greetings. In the other cities, towns and villages, it is the chief of the area or the D.C.E who stands to receive greetings.

After the marching, the headmaster of every school gives his address. It is a day that headmasters get the opportunity to put their problems before the chief and president. After his speech, the chief also gives his speech. He makes his plans about the school known to the people.

The school children now sing and play drums and follow the chief and his elders to the palace. From the palace they go to their various homes. They do not go back to school again because it is a holiday.

***Answer the following question***

- (1) What is a holiday?
- (2) In which month did Ghana gain her independence?
- (3) In which particular year did Ghana gain independence?
- (4) Why is that day a great day for all Ghanaians?
- (5) Which country ruled Ghana before Independence?
- (6) Who led Ghana to become an independent country?
- (7) What is the work of the policemen during the independence celebrations?
- (8) Mention the names of six other groups of workers who take part in the marching.
- (9) Who stands to receive greetings in the capital city?
- (10) What was Ghana called before the independence?

***Re-arrange the following words from the passage and form a sentence each with the words***

- (1) nnghaiasa
- (2) scoiona
- (3) cenednepined
- (4) laiprataiarnsenm
- (5) astmreadeh

***Arrange these words in an alphabetical order***

today, capital, nurse, durbar, chief, holiday, president, student, police, palace



# GREAT VICTORY ACADEMY

END OF YEAR EXAMINATION – 2012 ENGLISH GRAMMAR - CLASS FOUR

Name: ..... Marks:.....  
Folio No:..... Date:.....

### Circle the right answer

- (1) The master was very .....towards his disciples.  
(a) protecting (b) protective (c) protection
- (2) The Elmina Castle is a place of .....interest.  
(a) historic (b) history (c) historical
- (3) It is very easy to handle class four pupils because they are such .....children.  
(a) obey (b) obedient (c) obeying
- (4) The boy was praised for his .....  
(a) gentleness (b) gentle (c) gentles
- (5) The .....boy was punished by the teacher.  
(a) mischief (b) mischievous (c) mischieving
- (6) The old furniture proved to be very .....to the poor lady.  
(a) using (b) use (c) useful
- (7) The children were excited at the .....sight.  
(a) beauty (b) beautiful (c) beautifying
- (8) The patient lay .....when the doctor came to him.  
(a) sensible (b) senseless (c) sense
- (9) It is better to ignore Majeeda. She is in a .....mood today.  
(a) quarrelling (b) quarrelsome (c) quarred
- (10) Mr. and Mrs. Armah did not like that house because they wanted a more.....one.  
(a) space (b) spacious (c) spacing

### PART II

#### *Underline the correct form of the adverb in the brackets*

- (11) Of all the players, Ebo played (skillfully, more skillfully, most skillfully)
- (12) Najat works (much, more, most) than her brother.
- (13) Father slept (soundly, more soundly, most soundly) after a long journey by bus.
- (14) Esi Performed (well, better, best) than Portia at the concert.
- (15) Baaba types the (fast, fastest, faster) of all.
- (16) Among the accident patients, the driver sustained the (worst, worse, bad) injuries.
- (17) Felicity bought the (much, more, most) expensive dress on her birthday.
- (18) The small boy danced (joyfully, more joyfully, most joyfully) than the others.
- (19) Kojo visits my house (frequently, more frequently, most frequently) than Musah.
- (20) My mum is the (good, better, best) cook in the world.

### PART III

#### *Answer by circling the correct option*

- (21) The distance between Accra and Kumasi .....too long to travel on foot.  
(a) is (b) are (c) were



- (22) The lady with her children .....walking down the road.  
 (a) are (b) is (c) were
- (23) My sister and I .....up late on Sundays.  
 (a) wake (b) wakes (c) woke
- (24) We are sure to win the game as our players .....trained very hard.  
 (a) has (b) have (c) had
- (25) Abena and her friend .....to swim in the pool. (a) like (b) likes (c) liked
- (26) Neither Ofori nor her sister .....the way to the market.  
 (a) know (b) knows (c) knew
- (27) Our teacher always.....very affectionately. (a) speak (b) spoke (c) speaks
- (28) Dogs .....the most faithful pets.  
 (a) is (b) was (c) are
- (29) Ghana .....a number of regional languages.  
 (a) has (b) have (c) had
- (30) We .....Tuo-zaafi for dinner every Monday.  
 (a) ate (b) eats (c) eat

#### **PART IV**

*Underline the proper noun in the sentences below*

- (31) Accra is the capital of Ghana.
- (32) Hamattan is a dry season.
- (33) Kumasi is a beautiful city in Ghana.
- (34) Adilib is a good friend of Shaquille.
- (35) Long ago there was a famous composer by name Ephraim Amu.

*Fill in the gaps with a preposition or phrasal verb.*

*Use these (at, between, by, get on, look after)*

- (36) The driver was asked to .....with his driving.
- (37) Paul .....his pet very carefully.
- (38) I am good .....English Grammar.
- (39) We hope to get home.....that time.
- (40) Cynthia sits .....Akua and Vanessa in class.

#### **PART V**

*Fill in the blanks with the correct conjunctions given in this bracket (so, because, and, while, yet)*

- (41) Elodie was not there for the lesson.....she passed the test.
- (42) Irene is not well .....she is taking rest for another week.
- (43) Listowel is chocolate .....Isaac is dark in colour.
- (44) Mariama .....Munaya are good friends.
- (45) He cannot walk .....his legs have been amputated.

*Write active or passive attached to each of these sentences*

- (46) Someone has stolen her book.....
- (47) The boys enjoyed the circus show .....
- (48) 'Anowa' has been written by Jeff.
- (49) The picture of the ship was painted by Barbara.
- (50) Martina ate an ice – cream at the parlour.

*Good luck*







# GREAT VICTORY ACADEMY

END OF YEAR EXAMINATION - 2012 ENGLISH COMPOSITION - CLASS FOUR

Name: ..... Marks:.....

Folio No:..... Date:.....

## PART I

Punctuate this passage and capitalize where necessary

### Petty trading

maame mansah is a petty trader she comes from suame a suburb of kumasi in the ashanti region  
maame masah lives at tongo in the upper east region she travels to the bolgatanga market each  
market day maame mansah sells onions salt maize pomade plates off all kind and jewelry.

maame masah is married to mr akolgo a medical doctor she has two beautiful daughters grace  
and alamisi who attend great victory academy bolgatanga.

is maame mansahs family blessed each day mr akolgos prayer is for god to show them favour.  
mr akolgos family is christian family

## PART II


*Form ten (10) sentences from the substitution table below*

I	am		black
He		about five feet tall, and	fair in colour
She	is		dark

## PART III

*Choose one (1) question from this part*

- (1) Write a letter to your friend inviting him/her to spend his long vacation with you.
- (3) Write a letter to the headmaster of your school requesting him to give you a transfer certificate.

*Good luck*  *(Mr. Isaac & Mr. Listowell)*



# GREAT VICTORY ACADEMY

END OF YEAR EXAMINATION - 2012 FRENCH - CLASS FOUR

Name: ..... Marks:.....

Folio No:..... Date:.....

*Read the questions carefully and choose the option that will best complete the sentences below*

## PART I

- (1) Le premier jour de la semaine c'est.....  
(a) lundi (b) mardi (c) jeudi (d) Samedi
- (2) Le jour après lundi c'est.....  
(a) jeudi (b) mardi (c) Samedi (d) lundi
- (3) Aujourd'hui c'est lundi, demain sera.....  
(a) vendredi (b) jendi (c) mardi (d) Samedi
- (4) Aujourd'hui c'est Samedi hier était.....  
(a) Vendredi (b) Dimanche (c) Lundi (d) Jeudi
- (5) Le jour avant mardi c'est.....  
(a) jeudi (b) lundi (c) mercredi (d) samedi

## PART II

*Choose the subject pronoun that will best replace the underlined nouns in the sentences below*

- (6) Doris est malade.  
(a) Elle (b) Il (c) Vous (d) Tu
- (7) Edem est en classe.  
(a) Vous (b) Il (c) Nous (d) Je
- (8) Lois et Alice jouent ampé.  
(a) Nous (b) Tu (c) Elles (d) La
- (9) John et Moris mangent en classe.  
(a) Ils (b) Tu (c) Ma (d) Sa
- (10) Kofi et Joyce chantent.  
(a) Vous (b) Ils (c) Tu (d) Nous

## PART III

*Complete the sentences below with the right definite article.*

- (11) ..... fille est belle.  
(a) La (b) Un (c) Il (d) Tu
- (12) ..... maître va à l'école.  
(a) Je (b) La (c) Le (d) Leurs
- (13) ..... garçons jouent au football.  
(a) Les (b) La (c) Un (d) Pour
- (14) ..... chat est dans la boîte.  
(a) Une (b) Le (c) Des (d) Mes
- (15) ..... homme qui sort est mon père.  
(a) L' (b) Le (c) Stylo (d) Livre

**PART IV**

*Choose the English equivalent of the following French names*

- (16) Un chien is the French name, in English it is called.....  
(a) a cow                      (b) a bull                      (c) a dog                      (d) a cat
- (17) Un cochon is the French name, in English it is called.....  
(a) a cock                      (b) a donkey                      (c) a pig                      (d) a sheep
- (18) The English name for une poule is .....  
(a) a hen                      (b) a fowl                      (c) a pen                      (d) an owl
- (19) Un chat is the French name in English it is called.....  
(a) a bird                      (b) a cat                      (c) a fish                      (d) a mouse
- (20) Une armoire is the French name, in English it is called.....  
(a) a bench                      (b) a table                      (c) a cupboard                      (d) a chair

*Write the French equivalent of the following*

- (21) a duster                      \_\_\_\_\_→
- (22) a desk                      \_\_\_\_\_→
- (23) a flag                      \_\_\_\_\_→
- (24) a bookshop                      \_\_\_\_\_→
- (25) a classroom                      \_\_\_\_\_→
- (26) a black board                      \_\_\_\_\_→
- (27) a pupil                      \_\_\_\_\_→
- (28) a headmaster                      \_\_\_\_\_→
- (29) a cane                      \_\_\_\_\_→
- (30) a table                      \_\_\_\_\_→

**PART V**

*Complete the form below by providing all information about yourself*

Nom : .....

Prénom : .....

Âge : .....

Sex : .....

Nationalité : .....

Réligion : .....

Profession : .....

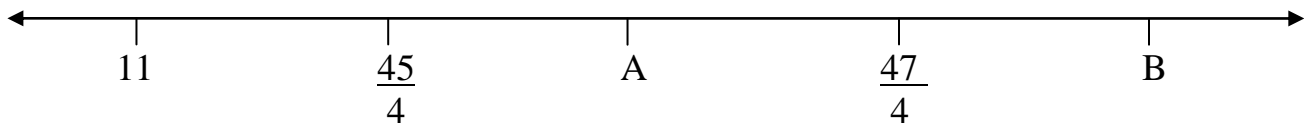
École : .....

Classe : .....

Adress : .....



- (16) What does the letter B represent?  
 (a) Product (b) Factors (c) Addents
- (17) .....refers to numbers that cannot divide two exactly.  
 (a) Even numbers (b) Odd numbers (c) Prime number
- (18) 2, 4, 6, 8, 10 .....are examples of .....  
 (a) Odd number (b) Even numbers (c) Prime numbers
- (19)  $500 - 200 = 300$ . The number 300 is the .....between 500 and 200.  
 (a) Sum (b) Product (c) Difference
- (20) What is the sum of 417 and 1040?  
 (a) 1457 (b) 5210 (c) 1557
- (21) 2,144 is greater than 2,134.  
 (a) True (b) False (c) None
- (22) Which of these fractions is equivalent to  $\frac{1}{2}$  ?  
 (a)  $\frac{3}{4}$  (b)  $\frac{4}{16}$  (c)  $\frac{21}{61}$



*Use the diagram above to answer questions 26 and 24*

- (23) What is the value of A?  
 (a) 12 (b)  $\frac{46}{4}$  (c)  $\frac{47}{4}$
- (24) What is the value of B?  
 (a) 12 (b)  $\frac{46}{4}$  (c)  $\frac{47}{4}$
- (25) What is the L.C.M of 3 and 4?  
 (a) 6 (b) 8 (c) 12
- (26) Weight is the same as .....  
 (a) time (b) heavy (c) mass
- (27) The unit of measurement for weight is .....  
 (a) kilometers (b) kilograms (c) centimeters
- (28) How many grams make 1 kilogram?  
 (a) 100g (b) 1000g (c) 10g
- (29) The distance around an object or a plane shape is also known as .....  
 (a) perimeter (b) area (c) distance
- (30) How many degrees do we have in a quarter turn?  
 (a)  $120^\circ$  (b)  $90^\circ$  (c)  $180^\circ$

## **THEORY**

*Answer three (3) questions in this section  
Question One (1) is compulsory with any other two questions*

- 1(a) When pupils of class four were asked their favourite meals, this is a summary of the pupils and what they liked.

<b>Meals</b>	Beans	Yam	Rice	T. Z	Kenkey
<b>Number of pupils</b>	12	1	3	6	9

Represent this information on a bar graph

- (a) Which meal was the favourite of many?  
(c) How many pupils were in class four?  
(d) How many pupils liked kenkey and T.Z.?  
(e) Arrange the following in ascending order 3144, 3137, 2445, 2045.

- (2)(a) Find the perimeters of the following plane shapes

<b>Plane shape</b>	<b>Length / side</b>	<b>Width</b>
Rectangle	5m	3m
Square	7m	
Equilateral Triangle	4m	

- (b) Copy and complete the following table.

Meters (m)	?	2	14			4	
Centimeters	100				900		250

- 3(a) Do the following addition and subtractions

$$\begin{array}{r} (1) \quad 3\text{kg } 400\text{g} \\ + \quad 7\text{kg } 300\text{g} \\ \hline \end{array}$$

$$\begin{array}{r} (2) \quad 4\text{kg } 500\text{g} \\ + \quad 1\text{kg } 700\text{g} \\ \hline \end{array}$$

$$\begin{array}{r} (3) \quad 21\text{kg } 300\text{g} \\ - \quad 15\text{kg } 400\text{g} \\ \hline \end{array}$$

$$\begin{array}{r} (4) \quad 6\text{kg } 900\text{g} \\ - \quad 5\text{kg } 950\text{g} \\ \hline \end{array}$$

**Using “past” and “to” tell the time on the following digital clock faces**

- (i) 4 : 30      (ii) 6:35      (iii) 8:45      (v) 5:00      (iv) 7: 10

- (b) Write in figures

- (i) Five minutes to three
- (ii) Quarter to midday
- (iii) Three quarters past nine
- (iv)  $\frac{1}{2}$  to one

4(a) Complete the table by saying whether each of the following pair is equivalent or not.

Fraction	VALUE		Equivalent ? Yes/No
	A	B	
1	$\frac{3}{5}$	$\frac{2}{5}$	
2	$\frac{12}{16}$	$\frac{5}{10}$	
3	1	$\frac{13}{13}$	
4	$\frac{1}{7}$	$\frac{7}{49}$	
5	$\frac{5}{14}$	$\frac{10}{28}$	
6	$\frac{1}{3}$	$\frac{18}{36}$	
7	$\frac{2}{7}$	$\frac{2}{14}$	
8	$\frac{3}{12}$	$\frac{1}{4}$	
9	$\frac{1}{4}$	$\frac{25}{100}$	
10	$\frac{13}{26}$	0.5	

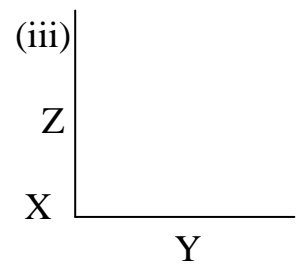
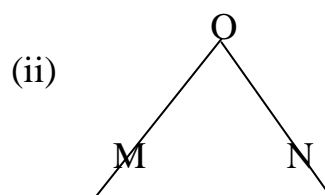
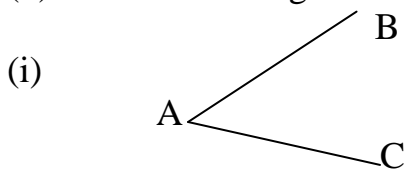
4(b) Add and simplify

(i)  $\frac{3}{15} + \frac{7}{15}$       (ii)  $\frac{1}{3} + \frac{2}{3}$       (iii)  $\frac{1}{2} + \frac{3}{8}$       (iv)  $\frac{1}{2} - \frac{1}{8}$

(5) Write Names attached to these definitions

- (i) Triangles with three equal sides
- (ii) Triangles with two equal sides
- (iii) Triangles with all sides unequal
- (v) Triangles with one right angle
- (iv) An angle less than  $90^\circ$

(b) Name these angles in three different ways.



(c) Draw angles for

- (i)  $\frac{1}{2}$  turn
- (ii) 1 turn
- (iii)  $\frac{1}{4}$  turn

